




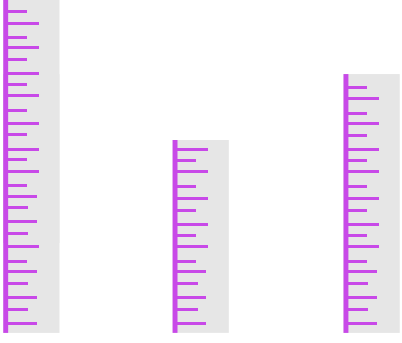
Name _____

Date _____



LONG, LONGER, LONGEST

Which one is it? Number the following groups with 1, 2, and 3 to show which one is long 1, longer 2, and longest 3.

 <input data-bbox="282 1125 375 1220" type="checkbox"/> <input data-bbox="451 1125 544 1220" type="checkbox"/> <input data-bbox="620 1125 712 1220" type="checkbox"/>	 <input data-bbox="909 1125 1002 1220" type="checkbox"/> <input data-bbox="1078 1125 1170 1220" type="checkbox"/> <input data-bbox="1247 1125 1339 1220" type="checkbox"/>
 <input data-bbox="282 1814 375 1908" type="checkbox"/> <input data-bbox="451 1814 544 1908" type="checkbox"/> <input data-bbox="620 1814 712 1908" type="checkbox"/>	 <input data-bbox="909 1814 1002 1908" type="checkbox"/> <input data-bbox="1078 1814 1170 1908" type="checkbox"/> <input data-bbox="1247 1814 1339 1908" type="checkbox"/>