

Name _____

Date _____




ROCKET MATH

Solve the equations to launch the rockets!


ANSWER KEY




$24 \div 3$
= 8



$16 \div 2$
= 8



$30 \div 5$
= 6



$35 \div 7$
= 5




$9 \div 3$
= 3



$13 \div 1$
= 13



$56 \div 8$
= 7



$18 \div 9$
= 2



$64 \div 8$
= 8



$81 \div 9$
= 9



$21 \div 7$
= 3



$20 \div 4$
= 5