


Name _____

Date _____



ROCKET MATH


Solve the equations to launch the rockets!




$10 \div 2$
=




$15 \div 5$
=




$28 \div 7$
=



$42 \div 6$
=




$80 \div 8$
=



$32 \div 4$
=



$45 \div 5$
=



$54 \div 9$
=



$6 \div 6$
=



$8 \div 4$
=



$49 \div 7$
=



$27 \div 9$
=